

1 1 1 1 1 1 1 1 1 1 1 1 1 1 1 1 1 1

1

2 2 2 2 2 2 2 2 2 2 2 2 2 2 2 2 2 2

2

3 3 3 3 3 3 3 3 3 3 3 3 3 3 3 3 3 3

3

4 4 4 4 4 4 4 4 4 4 4 4 4 4 4 4 4 4

4

5 5 5 5 5 5 5 5 5 5 5 5 5 5 5 5 5 5

5

6 6 6 6 6 6 6 6 6 6 6 6 6 6 6 6 6 6

6

7 7 7 7 7 7 7 7 7 7 7 7 7 7 7 7 7 7

7

8 8 8 8 8 8 8 8 8 8 8 8 8 8 8 8 8

8

9 9 9 9 9 9 9 9 9 9 9 9 9 9 9 9 9

9

10 10 10 10 10 10 10 10 10 10 10 10 10

1 2 3 4 5 6 7 8 9 10- 1 2 3 4 5

6 7 8 9 10-1 2 3 4 5 6 7 8 9 10 1 2

0 0 0 0 0 0 0 0 0 0 0 0 0 0 0 0

0

(Pazar 1.Ödev)

## 11-12-13-14-15-16-17-18-19-20

11 11 11 11 11 11 11 11 11 11 11

12 12 12 12 12 12 12 12 12 12 12

13 13 13 13 13 13 13 13 13 13 13

14 14 14 14 14 14 14 14 14 14

15 15 15 15 15 15 15 15 15 15 15

16 16 16 16 16 16 16 16 16 16 16

17 17 17 17 17 17 17 17 17 17 17

18 18 18 18 18 18 18 18 18 18 18

19 19 19 19 19 19 19 19 19 19 19

20 20 20 20 20 20 20 20 20 20

1-2-3-4-5-6-7-8-9-10-11-12-13-14

15-16-17-18-19-20

## ETKİNLİK

1 – Aşağıdaki elmalardan belirtilen sayı kadarını boyayınız.

5



1



7



0



9



4



6



3



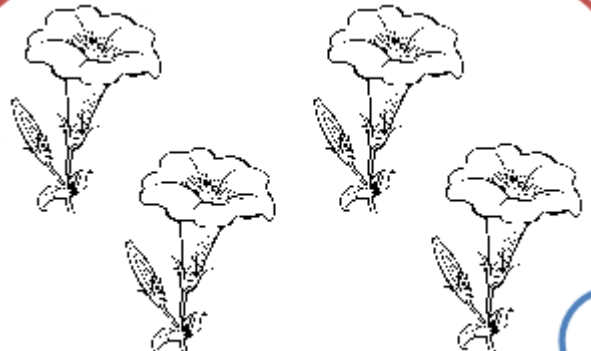
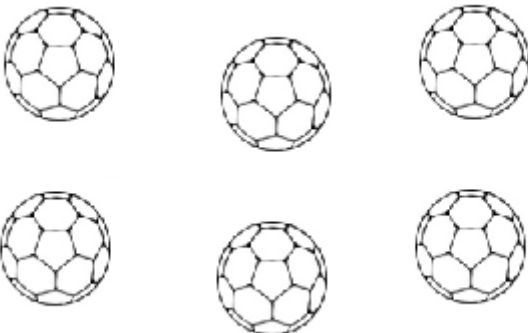
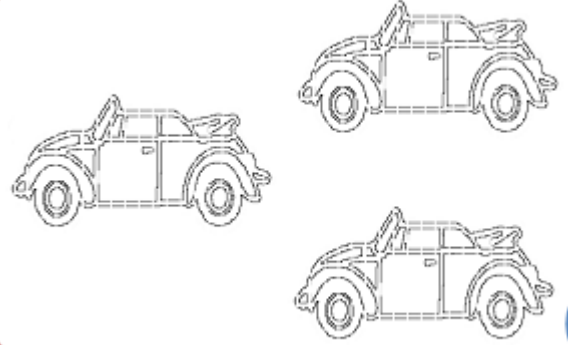

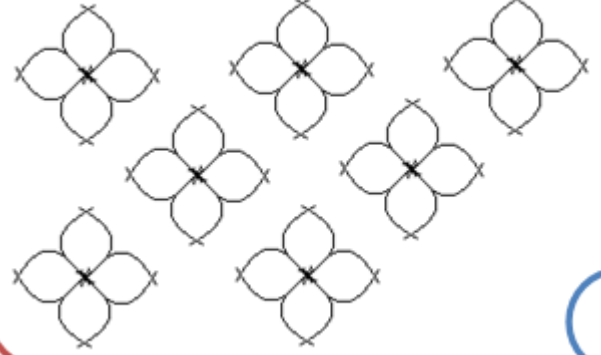



8



(Salı 1.Ödev)

## ETKİNLİK












1 – Aşağıdaki şemalardaki nesnelerin sayısının yazınız.



(Çarşamba 2.Ödev)

## NESNE SAYISINI BELİRLEME ETKİNLİĞİ

Aşağıdaki nesneleri sayarak kaç adet olduğunu altındaki kutu



**(Perşembe 1.Ödev)**

**1'den 20'ye kadar 1'er ritmik sayalım ve örnekteki gibi yazalım.**

1	2	3	4	5	6	7	8	9	10	11	12	13	14	15	16	17	18	19	20
---	---	---	---	---	---	---	---	---	----	----	----	----	----	----	----	----	----	----	----

	2		4			7			10		12			15					20
--	---	--	---	--	--	---	--	--	----	--	----	--	--	----	--	--	--	--	----

<b>1</b>		<b>3</b>		<b>5</b>			<b>8</b>			<b>11</b>			<b>14</b>				<b>18</b>		
----------	--	----------	--	----------	--	--	----------	--	--	-----------	--	--	-----------	--	--	--	-----------	--	--

<b>1</b>	<b>2</b>			<b>5</b>		<b>7</b>			<b>10</b>			<b>13</b>		<b>15</b>				<b>19</b>	
----------	----------	--	--	----------	--	----------	--	--	-----------	--	--	-----------	--	-----------	--	--	--	-----------	--

	<b>2</b>		<b>4</b>			<b>7</b>				<b>11</b>					<b>17</b>			
--	----------	--	----------	--	--	----------	--	--	--	-----------	--	--	--	--	-----------	--	--	--

<b>1</b>			<b>4</b>				<b>8</b>					<b>13</b>					<b>18</b>		
----------	--	--	----------	--	--	--	----------	--	--	--	--	-----------	--	--	--	--	-----------	--	--

<b>1</b>			<b>4</b>			<b>8</b>				<b>13</b>				<b>18</b>		
----------	--	--	----------	--	--	----------	--	--	--	-----------	--	--	--	-----------	--	--

[illegible][illegible][illegible][illegible][illegible]

**(Cuma 2.Ödev)**

[illegible]





91

98

RAKAMLARI TANIYALIM, YAZALIM.

(Pazar 2.Ödev)

1 2 3 4 5 6 7 8 9 10 0

1 1

2 2

3 3

4 4

5 5

6 6

7 7

8 8

9 9

0 0












SAY: 0-1-2-3-4-5-6-7-8-9-10

11-12-13-14-15-16-17-18-19-20

Diğer Ödevler:

### NESNE SAYISINI BELİRLEME ETKİNLİĞİ

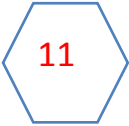
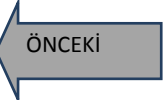
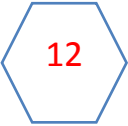

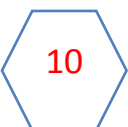


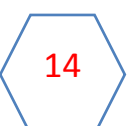


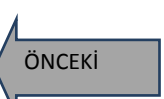
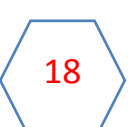


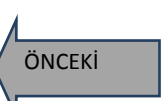
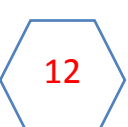


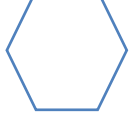
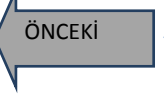
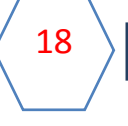
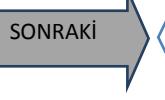




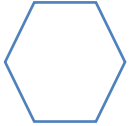





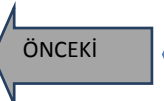

Aşağıdaki nesneleri sayarak kaç adet olduğunu altındaki kutuya YAZINIZ.






















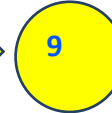




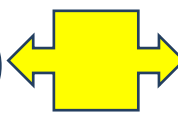







## ÖNCEKİ, SONRAKİ, ARASINDAKİ SAYI ETKİNLİĞİ

Aşağıdaki sayılardan bir önce ve bir sonra gelen sayıları örnekteki gibi yazınız.

Aşağıdaki sayıların arasında bulunan sayıyı örnekteki gibi yazalım.

## 5'er Ritmik Sayma Çalışması

**5-10-15-20-25-30-35-40-45-50-55-60-65-70-75-80-85-90-95-100**

**5'ten 100'e kadar 5'er ritmik sayalım ve örnekteki gibi yazalım.**

5	10	15	20	25	30	35	40	45	50	55	60	65	70	75	80	85	90	95	100
---	----	----	----	----	----	----	----	----	----	----	----	----	----	----	----	----	----	----	-----

	<b>10</b>		<b>20</b>		<b>30</b>		<b>40</b>		<b>50</b>		<b>60</b>		<b>70</b>		<b>80</b>		<b>90</b>		<b>100</b>
--	-----------	--	-----------	--	-----------	--	-----------	--	-----------	--	-----------	--	-----------	--	-----------	--	-----------	--	------------

5	15	25	35	45	55	65	75	85	95
---	----	----	----	----	----	----	----	----	----

[illegible]

		<b>15</b>			<b>30</b>			<b>45</b>						<b>75</b>					
--	--	-----------	--	--	-----------	--	--	-----------	--	--	--	--	--	-----------	--	--	--	--	--

5		15		25						55							100
---	--	----	--	----	--	--	--	--	--	----	--	--	--	--	--	--	-----

[illegible][illegible][illegible]





10	20								
10									100

Beşer ritmik sayarken verilen sayılardan bir önce ve bir sonra gelen sayıları yazınız.



— ○ —

— ○ —


25' ten başlayarak beşer beşer 100' e kadar yazınız.



— ○ —

— ○ —

45' ten başlayarak beşer beşer 80' e kadar yazınız.





— —

— —

30' dan başlayarak onar onar 100' e kadar yazınız.



— —

— —

[www.slaytyerim.com](http://www.slaytyerim.com)